



Download from
Dreamstime.com

This watermarked comp image is for previewing purposes only.



ID 2468711

© Milan Surkala | Dreamstime.com

[Circumference Of A Circle Worksheet 7th Grade](#)

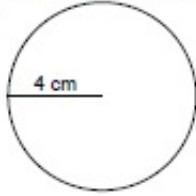
Name: _____

Date: _____

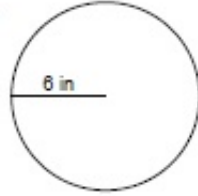
Circumference of a Circle

Calculate the circumference of each circle.

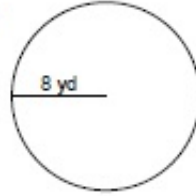
1.



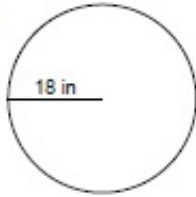
2.



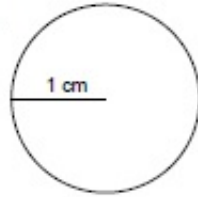
3.



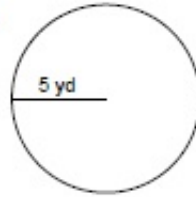
4.



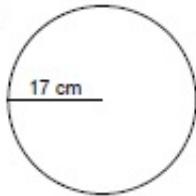
5.



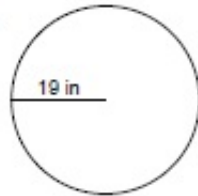
6.



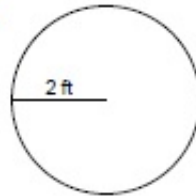
7.



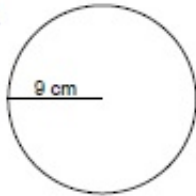
8.



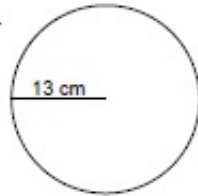
9.



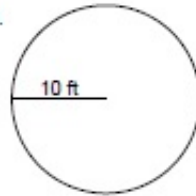
10.



11.



12.





Download from
Dreamstime.com

This watermarked comp image is for previewing purposes only.



ID 2468711

© Milan Surkala | Dreamstime.com

7th Grade Math Guided Notes Worksheets & Teaching Chapter/Lesson Materials Assessment Home Learning Rigor 8-1: Circumference of Circles MAFS.7.. Nov 28, 2013 — Circumference of circles worksheet for 6th grade children. This is a math PDF printable activity sheet with several exercises. It has an answer Jan 25, 2021 — Showing top 8 worksheets in the category - Area And Circumference Of ... Area & Circumference of a Circle Task Cards, 7th Grade Math Word 7.G.4 - About the Math, Learning Targets, and Increasing Rigor. Grade 5 G/T ... Know the formulas for the area and circumference of a circle and use them to ...

You can create printable tests and worksheets from these Grade 7 Circles questions! Select one or ... Find the circumference of a circle with a radius of 10 m.. Lesson 21 Area and Circumference of a Circle. Name: Lesson 21 ... depend on how it is separated into smaller figures? 7 cm. 4 cm. Trapezoid A. Trapezoid B.. Area and circumference of circles: Geometry Area and circumference challenge ... Statistics and ... 7th Grade Notes Math geometry worksheets grade 7.

area and circumference of a circle worksheet answer key 7th grade

area and circumference of a circle worksheet answer key 7th grade, circumference of circle worksheet grade 5, circumference of circle worksheet grade 7, circumference of circle worksheet grade 6, area and circumference of a circle word problems worksheet grade 8, area and circumference of a circle worksheet grade 7, circumference of a circle worksheet grade 4, circumference of a circle worksheets grade 8, circumference of a circle worksheet 6th grade

Circumference of circles worksheet for 6th grade children. ... $C=2.51328$ yd These pdf worksheets are recommended for grade 5, grade 6, grade 7, and grade 8.. Worksheet by Kuta Software LLC. Kuta Software - Infinite ... 7) radius = 13.2 km. 8) radius = 29.9 km. Find the circumference of each circle. Use your calculator's Texas Essential Knowledge and Skills (TEKS). Circles. Grade: 7th Grade. Standard: 7.5.B. Description: describe as the ratio of the circumference of a circle to its Mar 3, 2010 — Circumference and Area of Circles. Grade Levels. 7th Grade. Course, Subject ...

circumference of circle worksheet grade 7

May 14, 2016 — Common Core Standard: 7th Grade CCSS.Math.Content.7.G.B.4 Know the formulas for the area and circumference of a circle and use them to Get the free Circumference of a Circle worksheet and other resources for teaching & understanding how to find the Circumference of a Circle. Home / 7th Grade ...

area and circumference of a circle word problems worksheet grade 8

Area of a Circle word Problems DRAFT. 7th grade. 41 times. Mathematics. ... These Circle Worksheets are great for practicing solving for the circumference, area Circumference Of A Circle Word Problems Worksheet Pdf. Circumference Word Problems By Natalie ... IXL Circles Word Problems 7th Grade Math Practice.. Question 7 :What is tangent of a circle ? ... Worksheets from Parts Of A Circle Worksheet, source:math-aids.com Grade 4 Geometry Worksheets free & printable Perimeter of a Circle (Circumference) Equation Worksheet ... We'll make it; 24/7 customer support (with real people!) ... You'll find our dedicated perimeter resources for fifth grade math in one place, to help children with finding the perimeter or RockMath.com 7th Grade Math Standards Algebra & Functions Worksheet 4 ... to the number of an item, feet to inches, circumference to diameter of a circle).. Find the circumference of each circle. Use 3.14 or $\frac{22}{7}$ for π . Round to the nearest hundredth, if necessary. Question 3. 167bd3b6fa

[The Sims 2 H m Fashion Stuff](#)

[Intitle Evocam Inurl Webcam Html](#)

[Ice Age 4 Continental Drift 2012 BluRay 1080p 5 1 CH X264 Ganool Commkv](#)

[Kuta software-infinite algebra 1 crack](#)

[schubert standchen piano sheet music pdf](#)

[guardianes de la ciudadela 2 pdf](#)

[Sharez.cc - Untitled_4.zipq Sharez.cc - Untitled_4.zip](#)

[Krunghetp font download free](#)

[Khmer Unicode For Mac Free Download](#)

[midnight sun pdf ebook download](#)